

1.小朋友，你會按順序填數嗎？

Can you fill in the numbers in sequence?

1 () 3, 4 () 6 () 8, 9, 10

答案 1: 2

答案 2: 5


答案 3: 7

2.小朋友，你會數數嗎，圓形有 () 個，愛心有 () 個，三角形有 () 個？

Can you count? How many circles, hearts, and triangles are there?



()



()



()

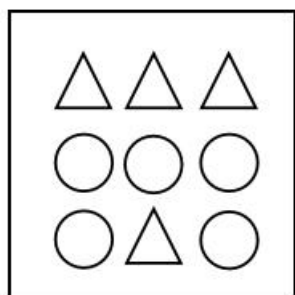
答案 1: 3

答案 2: 4

答案 3: 6

3.數一數圖中三角圖形的個數有 () 個。

Count the number of triangles in the picture. There are () triangles.



答案: 4

4.判斷以下從小到大順序爭取的是？

Which of the following sequences is in ascending order?

A.234567

B.569253

C.123467

D.123345

答案: A

5.一個蘋果切成 4 塊，Tony 吃了 2 塊，還剩下幾塊？

An apple is cut into 4 pieces. Tony ate 2 pieces. How many pieces are left?

- A. 1
- B. 2
- C. 3
- D. 4

答案： B

6. 一隻貓有 4 條腿， _____ 隻貓總共有 16 條腿。

A cat has 4 legs. () cats have a total of 16 legs.

答案 1: 4

7. 在幼稚園的玩具箱裏，一共有 10 個玩具車，小朋友們拿走了 4 個，玩具箱裏還剩多少個玩具車？ (There are 10 toy cars in the kindergarten toy box. The children took 4. How many toy cars are left in the box?)

- A. 6
- B. 7
- C. 5
- D. 10

答案： A

8. 在幼稚園的玩具箱裏，有紅、黃、藍三種顏色的球，每種顏色各有 4 個球。如果 Ming 從中拿出 1 個紅色的球，現在玩具箱裏一共有多少個球？ (In the kindergarten toy box, there are red, yellow, and blue balls, 4 of each color. If Ming takes out 1 red ball, how many balls are left in the box now?)

- A. 11
- B. 10
- C. 12
- D. 9

答案： A

9. Chris 排隊，他前面有 3 個小朋友，後面有 2 個小朋友，這一排總共有多少個小朋友？ (Chris is in line. There are 3 children in front of him and 2 behind him. How many children are in the line?)

- A. 4
- B. 5
- C. 6
- D. 3

答案： C

10. 在幼稚園的活動中，小朋友們排成一排，從左邊數 Ken 是第 3 個，從右邊數他是第 4 個。這一排一共有多少個小朋友？ (During an activity in kindergarten, the children line up in a row. Ken is the 3rd child from the left and the 4th child from the right. How many children are in the row?)

- A. 5
- B. 6

C. 7

D. 8

答案： B

11. $5 - (\quad) = 3$, $7 + (\quad) = 11$

答案 1: 2

答案 2: 4

12. $7 - (\quad) = 4$, $9 + (\quad) = 15$

答案 1: 3

答案 2: 6

13. 一個盒子裏有 6 個紅球和 4 個藍球，如果隨機取出一個球，取出什麼顏色的球的可能性最大？(There are 6 red balls and 4 blue balls in a box. If you randomly take out one ball, which color is most likely to be picked?)

A. 紅球 Red ball


B. 藍球 Blue ball

C. 黃球 Yellow ball

D. 綠球 Green ball

答案： A

14. 數一數圖中三角圖形的個數有()個。(Count the number of triangles in the picture. There are () triangles.)



答案： 4

15. 判斷以下從小到大順排序的是？(Which of the following sequences is in ascending order?)

A. 234567

B. 569253

C. 123467

D. 123345

答案： A

16. 在幼稚園的玩具箱裏，一共有 10 個玩具車，小朋友們拿走了 4 個，玩具箱裏還剩多少個玩具車？(There are 10 toy cars in the kindergarten toy box. The children took 4. How many toy cars are left in the box?)

A. 6

- B. 7
- C. 5
- D. 10

答案：A

17. 在幼稚園的玩具箱裏，有紅、黃、藍三種顏色的球，每種顏色各有 4 個球。如果 Ming 從中拿出 1 個紅色的球，現在玩具箱裏一共有多少個球？（In the kindergarten toy box, there are red, yellow, and blue balls, 4 of each color. If Ming takes out 1 red ball, how many balls are left in the box now?）

- A. 11
- B. 10
- C. 12
- D. 9

答案：A

18. 找規律填數（Find the pattern and fill in the numbers.）

98 96 94 92 90 () () () ()

答案 1: 88

答案 2: 86

答案 3: 84

答案 4: 82

19. 把 24 小時制化為 12 小時制，（Convert from 24-hour format to 12-hour format.）

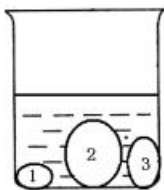
15:30 () 19:00 () 20:30 ()

答案 1: 2:30

答案 2: 7:00

答案 3: 8:30

20. 杯子中有 1, 2, 3 三塊石頭，要使水面下降的儘量少，應該把其中哪一塊拿出來？要使水面下降的儘量多，應該把其中哪一塊拿出來？（There are three stones (1, 2, and 3) in a cup. To make the water level drop the least, which stone should be removed? To make the water level drop the most, which stone should be removed?）



- A. 1
- B. 2
- C. 3

答案：B

21. A 兔、B 兔和 C 兔三只兔子在賽跑。A 兔說：“我跑得不是最快的，但比 C 兔快。”請

你說說，誰跑得最快?誰跑得最慢? () 跑得最快， () 跑得最慢。

(Rabbits A, B, and C are in a race. Rabbit A says, "I am not the fastest, but I am faster than Rabbit C." Who is the fastest? Who is the slowest?() is the fastest, () is the slowest.)

答案 1: B

答案 2: C

22. $1+3+5+7+9=$ ()

答案 1: 25

23. 1 個西瓜的重量=3 個鳳梨的重量。1 個鳳梨的重量=3 個梨的重量，1 個西瓜的重量=() 個梨的重量。(The weight of 1 watermelon equals the weight of 3 pineapples. The weight of 1 pineapple equals the weight of 3 pears. The weight of 1 watermelon equals the weight of () pears.)

答案 1: 9

24. 二年級有 50 名運動員參加學校長跑比賽，號碼排到 50。這些號碼中共出現了 () 個“1”。(There are 50 athletes from the second grade participating in the school's long-distance race, with numbers ranging up to 50. How many times does the digit "1" appear in these numbers?)

答案: 13

25. 小朋友排隊看電影，從排頭數起，Lindy 是第 18 個，從排尾數起，Linda 是第 28 個。這隊共有 () 人。(Some Children are lining up to watch a movie. Lindy is the 18th from the front, and Linda is the 28th from the back. How many children are in the line?)

14. 答案: 45

26. 在幼稚園的玩具箱裏，有紅、黃、藍三種顏色的球，每種顏色各有 4 個球。如果 Ming 從中拿出 1 個紅色的球，現在玩具箱裏一共有多少個球? (In the kindergarten toy box, there are red, yellow, and blue balls, 4 of each color. If Ming takes out 1 red ball, how many balls are left in the box now?)

A. 11

B. 10

C. 12

D. 9

答案: A

27. 一個盒子裏有 6 個紅球和 4 個藍球，如果隨機取出一個球，取出什麼顏色的球的可能性最大? (There are 6 red balls and 4 blue balls in a box. If you randomly take out one ball, which color is most likely to be picked?)

A. 紅球 Red ball

B. 藍球 Blue ball

C. 黃球 Yellow ball

D. 綠球 Green ball

答案：A

28.在幼稚園的玩具箱裏，有紅、黃、藍三種顏色的球，每種顏色各有4個球。如果Ming從中拿出1個紅色的球，現在玩具箱裏一共有多少個球？(In the kindergarten toy box, there are red, yellow, and blue balls, 4 of each color. If Ming takes out 1 red ball, how many balls are left in the box now?)

A. 11

B. 10

C. 12

D. 9

答案：A

29.1個西瓜的重量=3個鳳梨的重量，1個鳳梨的重量=3個梨的重量，1個西瓜的重量=()個梨的重量。(The weight of 1 watermelon equals the weight of 3 pineapples. The weight of 1 pineapple equals the weight of 3 pears. The weight of 1 watermelon equals the weight of () pears.)

答案 1：9

30.按規律填數(Fill in the numbers according to the pattern)

0 · 1 · 3 · 6 · 10 · () ()

答案 1：15

答案 2：21

31.小猴與小兔去摘桃，小猴摘下15個桃，當小猴將自己的桃分3個給小兔子時，它們的桃就一樣多，你知道小兔子摘了()桃？(The little monkey and the little rabbit went to pick peaches. The little monkey picked 15 peaches. When the little monkey gave 3 of his peaches to the little rabbit, they both had the same number of peaches. How many peaches did the little rabbit pick?)

答案 1：9

32. $11 + 13 + 15 + 17 + 19 = ()$

答案 1：75

33.小動物舉行運動會，小兔“A”、小鹿“B”參加50米的賽跑。小兔A用12秒，小鹿B用8秒。()跑得快，快()秒？(The little animals are holding a sports meet. Rabbit “A” and Deer “B” are participating in a 50-meter race. Rabbit A took 12 seconds, while Deer B took 8 seconds. So () runs faster,? faster by () seconds?)

答案 1：B


答案 2：4

34.爸爸今年24歲，媽媽今年23歲，當爸爸媽媽兩人的歲數合起來是53歲時，爸爸()歲，媽媽()歲。(Dad is 24 years old this year, and Mom is 23 years old this year. When their combined ages total 53 years, Dad will be () years old, and Mom will be () years old.)

答案 1：27

答案 2：26

35.長方形有_____個 (How many rectangles are there?)



答案 1 : 10

36.有 16 個小朋友排成一排。Terence 的左邊有 6 個小朋友。Terence 的右邊有_____個小朋友？ (There are 16 children standing in a row. There are 6 children to the left of Terence. How many children are to the right of Terence?)

答案 1 : 9

37.與 17 相鄰的兩個數分別是 (____) 和 (____)。 (The two numbers adjacent to 17 are () and ())

答案 1 : 16

答案 1 : 18